

Table of Contents

Introduction	4
Puzzle Hints	5–6
Picture Puzzles 7–29	
Shape Find	7
Spun Shapes	7
That’s Not an Animal!	7
Rebus.....	8
What’s Different?	8
Crayon Game	9
Map Madness!.....	10
Split Shapes.....	11
What’s Different?	11
Brainstorm Game	12
Map Madness!.....	13
That’s Not an Animal!	14
What’s Different?	14
Shape Slap.....	15
Spun Shapes	16
Shape Find	16
Split Shapes.....	17
Rebus.....	17
That’s Not an Animal!	17
Tangram Game	18
Map Madness!.....	19
Shape Find	20
What’s Different?	20
Cartoon Helpers	21
Split Shapes.....	22
Rebus.....	22
That’s Not an Animal!	22
Map Madness!.....	23
Triangle Take-Away Game.....	24
Spun Shapes	25
Shape Find	25
Rebus.....	25
Split Shapes.....	26
That’s Not an Animal!	26
What’s Different?	26
Shape Slap.....	27
Map Madness!.....	28
Spun Shapes	29
Shape Find	29
Word Puzzles 30–55	
Missing Letter.....	30
Transformers.....	30
Crossword.....	30
Hide and Seek.....	31
Crack the Code.....	31
Word Circles.....	31
Crossword Challenge	32
Letter Scramble.....	33
Hide and Seek.....	33
Crossword.....	33
Crack the Code.....	34
Transformers.....	34
Letter Scramble.....	34
Changing Letters.....	35
Hide and Seek.....	36
Word Circles.....	36
Crossword.....	36
Transformers.....	37
Word Circles.....	37
Crack the Code.....	37
Fronts and Backs.....	38
Crossword.....	39
Hide and Seek.....	39
Letter Scramble.....	39
Missing Letter.....	40
Word Circles.....	40
Crack the Code.....	40
Beginnings and Ends Game	41
Hide and Seek.....	42
Before and After	42
Crossword.....	42
Crack the Code.....	43
Letter Scramble.....	43
Word Circles.....	43
Missing Letter.....	44
Rhyme Game	44
Transformers.....	45
Before and After	45
Missing Letter.....	45
Crossword.....	46
Before and After	46
Word Circles.....	46
Crossword Challenge	47
Transformers.....	48
Hide and Seek.....	48
Crossword.....	48
Missing Letter.....	49
Before and After	49
Transformers.....	49
Changing Letters.....	50
Missing Letter.....	51
Crack the Code.....	51
Word Circles.....	51
Before and After	52
Hide and Seek.....	52
Crossword.....	52
Rhyme Game	53

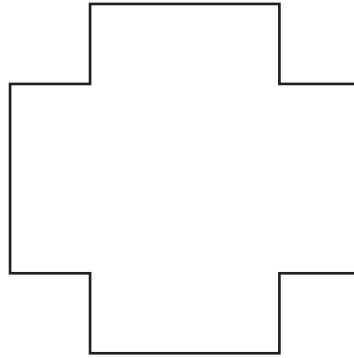
Table of Contents *(cont.)*

Crack the Code	54	Sudoku	69	What's Next?	86
Word Circles	54	Operation Box	69	How Old?	86
Crossword	54	Meet Your Match	70	Letter Box	86
Before and After	55	Fill in the Blanks	71	Reversi	87
Transformers	55	Sudoku	71	Miguel, Anna, Tran, and Lisa	88
Crossword	55	It's Touching	71	Letter Box	88
Number Puzzles	56–79	Thinking of a Number	72	Corinne's Necklace	89
In Addition	56	Operation Box	72	Blocked	90
Math Path	56	In Addition	72	What's Next?	91
Sudoku	57	Tic-Tac-Toe Race	73	How Old?	91
In Addition	57	Fill in the Blanks	74	Odd Animal Out	91
Tic-Tac-Toe Race	58	Math Path	74	Letter Box	92
Math Path	59	Sudoku	74	Miguel, Anna, Tran, and Lisa	92
Thinking of a Number	59	Thinking of a Number	75	Boxed Out	93
Operation Box	59	In Addition	75	Katy's Binder	94
Sudoku	60	It's Touching	75	How Old?	95
In Addition	60	Snake Race	76	Letter Box	95
Snake Race	61	Fill in the Blanks	77	Odd Animal Out	95
Math Path	62	Sudoku	77	Ship Shapes	96
Sudoku	62	Math Path	77	What's Next?	97
In Addition	62	Operation Box	78	Miguel, Anna, Tran, and Lisa	97
Thinking of a Number	63	In Addition	78	Liza's Magic Wand	98
Fill in the Blanks	63	Sudoku	79	How Old?	99
Math Path	63	It's Touching	79	Letter Box	99
Addition Challenge	64	Logic Puzzles	80–100	Odd Animal Out	99
Sudoku	65	Miguel, Anna, Tran, and Lisa	80	What's Next?	100
In Addition	65	How Old?	80	Miguel, Anna, Tran, and Lisa	100
Thinking of a Number	65	Four-in-a-Row	81	Answer Key	101–112
Sudoku	66	What's Next?	82		
It's Touching	66	Adam's Coat	82		
Plus or Minus Game	67	Miguel, Anna, Tran, and Lisa	83		
Fill in the Blanks	68	Odd Animal Out	83		
Math Path	68	Add One or Two	84		
In Addition	68	Jim's Jump Rope	85		
Thinking of a Number	69				

8

Split Shapes

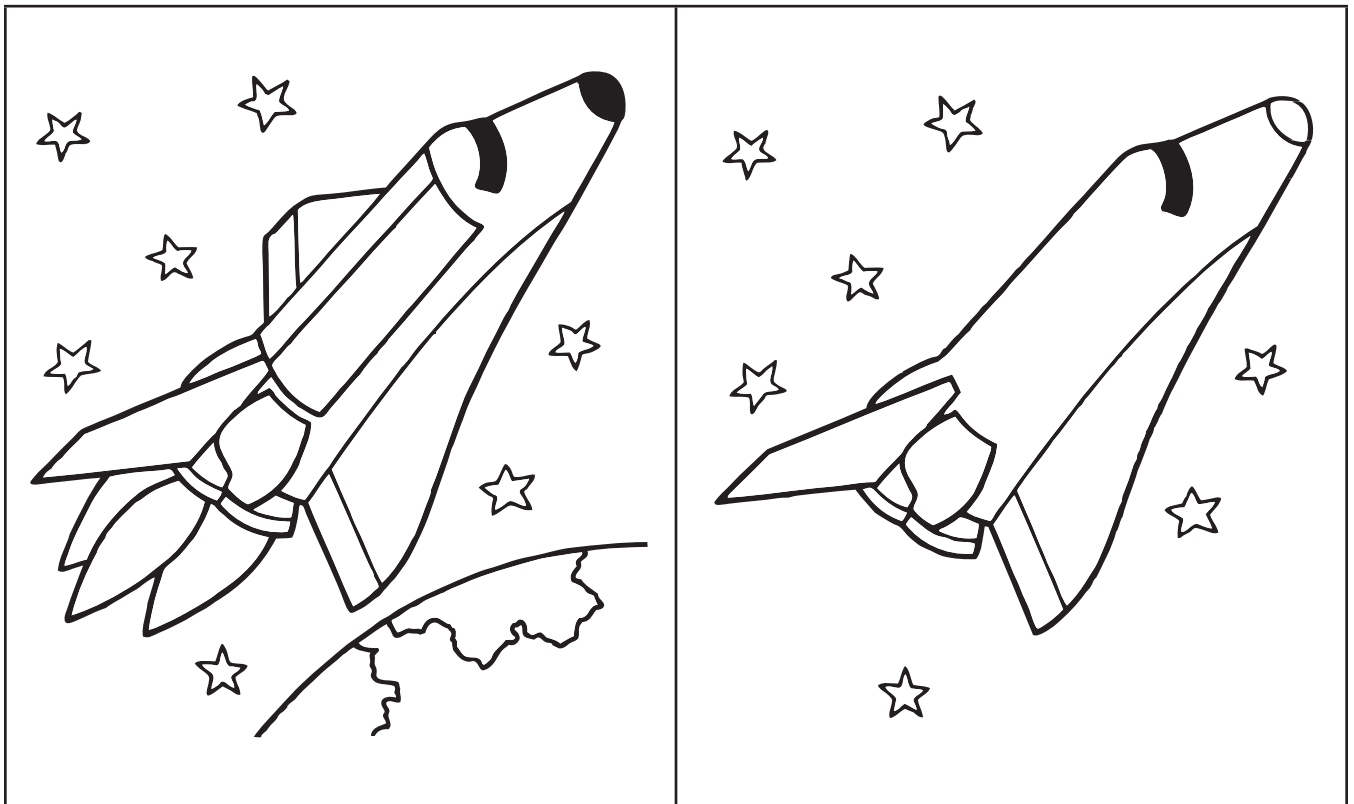
Can you draw six lines on this shape to make twelve triangles?



9

What's Different?

Can you spot the five differences between these two pictures? Circle them.



71 Crack the Code

What kind of house weighs the least? Crack the code to find out!

g	l	h	t	i	o	a	e	u	s
1	2	3	4	5	6	7	8	9	10

7		2	5	1	3	4	3	6	9	10	8

72 Letter Scramble

Make three words using all of these letters: badre.

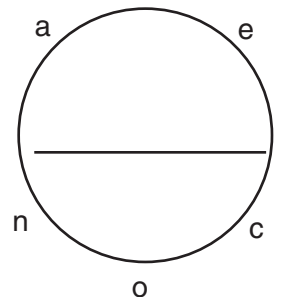
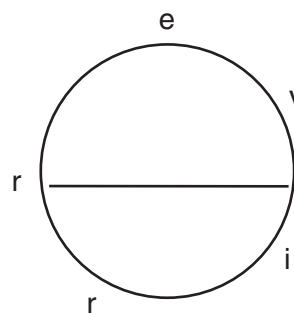
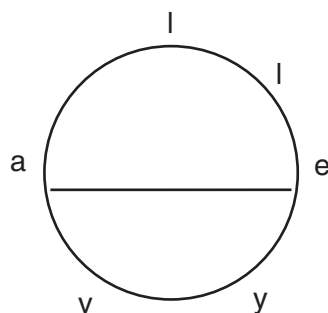
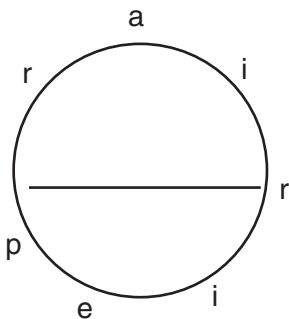
- _____
- _____
- _____



Now, use the words to write a sentence about the picture.

73 Word Circles

Start at any letter. Go left or right. What geographic features can you spell? Write them in the circles.



Plus or Minus Game

Directions:

1. Find a partner. Each of you will need a copy of this sheet and a different-colored pen.
2. Look at the rows below. In each row, you have to add and/or subtract to get from the first number to the last. The first one has been done for you.
3. Race your partner to solve the rows. You do not have to go in order. The person who solves the most rows wins.
4. Ready, set, go!

16	(+) or -	3	+ or (-)	9	(+) or -	5	=	15
----	----------	---	----------	---	----------	---	---	----

21	+ or -	9	+ or -	4	+ or -	6	=	14
----	--------	---	--------	---	--------	---	---	----

35	+ or -	8	+ or -	7	+ or -	23	=	27
----	--------	---	--------	---	--------	----	---	----

8	+ or -	7	+ or -	17	+ or -	18	=	36
---	--------	---	--------	----	--------	----	---	----

72	+ or -	36	+ or -	18	+ or -	9	=	9
----	--------	----	--------	----	--------	---	---	---

18	+ or -	7	+ or -	9	+ or -	6	=	26
----	--------	---	--------	---	--------	---	---	----

62	+ or -	15	+ or -	6	+ or -	33	=	20
----	--------	----	--------	---	--------	----	---	----

53	+ or -	18	+ or -	4	+ or -	18	=	21
----	--------	----	--------	---	--------	----	---	----

Miguel, Anna, Tran, and Lisa





155

Miguel, Anna, Tran, and Lisa went on vacation, each to a different place. Read each clue. Then, mark the chart to see who went where.

Clues:

- ✓ Miguel went somewhere in the United States.
- ✓ Tran went to Florida.
- ✓ Lisa didn't go to Italy.



	Hawaii	Mexico	Italy	Florida
 Miguel				
 Anna				
 Tran				
 Lisa				

Answers:

Where did Miguel go?

Where did Anna go?

Where did Tran go?

Where did Lisa go?

How Old?

156

Brian is five years younger than his older brother.

In two years, his brother will be twice as old as Brian is now.

How old are Brian and his brother?

