

# Table of Contents

---

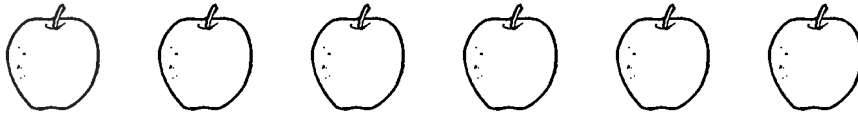
<b>Introduction</b> .....	3
<b>Skills Index</b> .....	5
<b>Testing Your Best</b> .....	9
<b>Practice Guessing</b>	
Why Practice Guessing? .....	11
Here's the Idea .....	11
<b>Language Arts</b>	
Reading .....	16
Writing .....	26
<b>Computer/Technology</b>	
Issues .....	32
Knowledge and Skills .....	35
<b>Mathematics</b>	
Whole Numbers .....	38
Geometric Ideas .....	45
Classification and Pattern .....	48
Metric and Customary Measurement .....	51
Problem Solving .....	56
<b>Science</b>	
Process .....	58
Life, Physical, and Earth Sciences .....	62
<b>Social Studies</b>	
Citizenship, Authority, and Responsibility .....	69
Religious and Cultural Traditions .....	72
Government .....	75
Geography .....	77
<b>Parent Handouts</b> .....	79
<b>Test-Taking Tips</b> .....	84
<b>Testing Terms</b> .....	85
<b>Answer Key</b> .....	88

# Mathematics: Problem Solving

**Directions:** This part of the test asks puzzle questions. Read each question, and fill in the circle of your answer. Here is a sample.

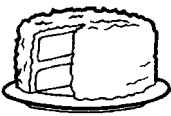
## Sample

Three friends have six apples. They want to share. How many apples should each friend get?



- (A) 3
- (B) 1
- (C) 2
- (D) 6

1. In alphabetical order, which one would be first? Fill in the circle under your answer.



(A)



(B)



(C)



(D)

2. In alphabetical order, which one will be last?



(A)



(B)



(C)



(D)

3. In alphabetical order, which one would be in the middle?



(A)

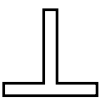


(B)



(C)

4. Look at the first shape in the row. Which one of the other shapes looks like it? Fill in the circle under your answer.




(A)



(B)

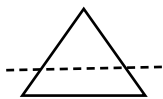


(C)



(D)

5. If you cut on the dotted line, which one will make two triangles?



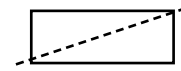
(A)



(B)



(C)



(D)



# Science: Process

**Directions:** This is the science part of the test. You will answer questions about temperature, size, and things you see. Read each question, and fill in the circle of your answer. Here is a sample.

## Sample

You can tell that something is hot or cold using what part of your body? Fill in the circle under your answer.



(A)



(B)



(C)

1. Which one do you think is the hardest?



(A)

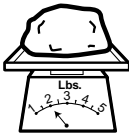


(B)




(C)


2. Which rock is the heaviest? Fill in the circle under your answer.



(A)



(B)



(C)

3. Which one is the tallest? Fill in the circle of your answer.



(A)



(B)




(C)

4. Which one is the longest?



(A)



(B)



(C)

5. Which one shows the highest temperature?

