

Table of Contents

How to Use This Book 3

NCTM Standards 4

Unit 1

How to Name and Measure Angles 5

Practice Identifying Angles 6

Practice Measuring Angles
with a Protractor 7

Practice Measuring More Angles
with a Protractor 8

Unit 2

How to Identify and Measure the Interior
Angles of a Triangle 9

Practice Identifying Triangles 10

Practice Computing the Interior
Angles of a Triangle 11

Practice Measuring the Angles of a Triangle
with a Protractor 12

Unit 3

How to Identify Polygons 13

Practice Identifying Polygons 14

Practice Measuring Angles
in Quadrilaterals 15

Practice Measuring Angles in
Other Polygons 16

Unit 4

How to Compute Perimeter 17

Practice Computing the Perimeter of Squares,
Rectangles, and Parallelograms 18

Practice Computing the Perimeter of
Other Quadrilaterals 19

Practice Computing the Perimeter of
Regular Polygons. 20

Unit 5

How to Compute Areas of
Geometric Shapes 21

Practice Computing Areas of
Geometric Shapes 22

Practice Computing Areas
with Graph Paper. 23

Practice Computing Areas
with Square Units 24

Unit 6

How to Compute Area 25

Practice Computing the Areas of Squares . . . 26

Practice Computing the Areas of Rectangles
and Parallelograms 27

Practice Computing the Areas of Triangles . . 28

Unit 7

How to Use a Compass 29

Practice Inscribing Triangles in a Circle. . . . 30

Practice Inscribing Hexagons in a Circle . . . 31

Practice Inscribing Squares in a Circle. . . . 32

Unit 8

How to Recognize Symmetry, Congruence,
and Similarity 33

Practice Drawing with Lines of Symmetry. . . 34

Practice Identifying Congruent Shapes 35

Practice Recognizing Similar and
Congruent Figures 36

Unit 9

How to Work with Solid Figures 37

Practice Identifying Solid Figures 38

Practice Identifying Faces, Edges,
and Vertices 39

Practice Euler’s Formula with Polyhedrons . . 40

Unit 10

Practice Working with Radius
and Diameter. 41

Practice Working with Circles 42

Unit 11

Practice Working with Tessellations
(Triangles and Rectangles). 43

Practice Working with Tessellations
(Hexagons and Triangles) 44

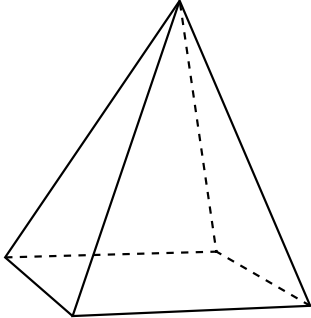
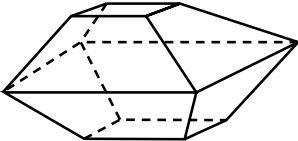
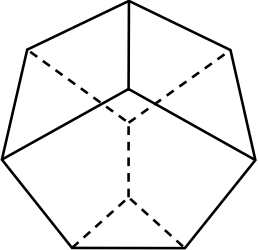
Unit 12 (Technology)

Using Shapes to Create Artwork 45

Answer Key 47

The following chart contains other polyhedra. Can you use Euler's formula to determine the number of faces (F), vertices (V), and edges (E) for each figure? Fill in the chart.

$$\text{Euler's Formula: } F + V - 2 = E$$

Polyhedron	Faces	Vertices	Edges
pentahedron 			
decahedron 			
heptahedron 			

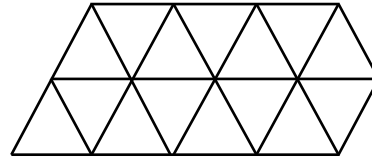
Working with Tessellations (Triangles and Rectangles)

Facts to Know

A *tessellation* is a repeated pattern using geometric figures that cover a surface entirely.

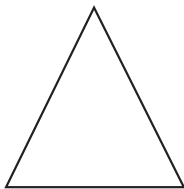
There are no spaces between the figures.

This tessellation is made with equilateral triangles.



Directions: Use the figures to extend the tessellations shown below by outlining the figures as often as you can in the space provided.


equilateral triangle



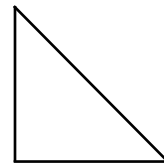
square



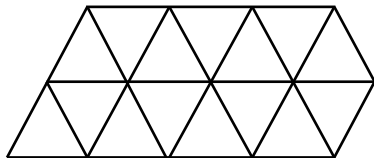
rectangle



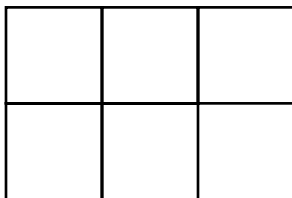
isosceles right triangle



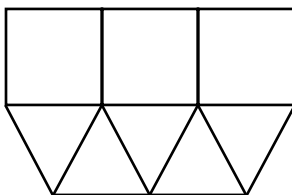
1. equilateral triangle tessellation



2. square tessellation



3. equilateral triangle and square tessellation



4. isosceles right triangle tessellation

