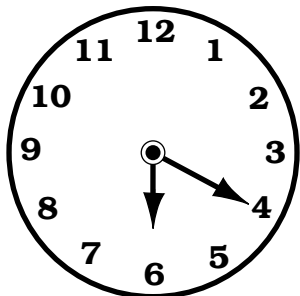


••••• Working with Basic Units of Time


Directions: Use the table on page 5 to answer the questions. Read the time on the clock and answer the questions.

1.



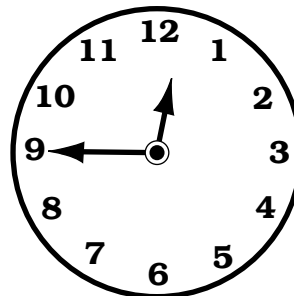
What time was it 10 minutes earlier? _____

2.




What time was it 5 minutes earlier? _____

3.




What time was it 40 minutes earlier? _____

4.




What time was it 25 minutes earlier? _____

5.




What time was it 50 minutes earlier? _____

6.



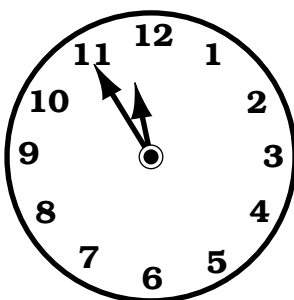
What time was it 20 minutes earlier? _____

7.




What time was it 35 minutes earlier? _____

8.



What time was it 30 minutes earlier? _____

9.



What time was it 50 minutes earlier? _____

10. $4 \text{ mins} + 21 \text{ hrs} + 3 \text{ hrs} + 5 \text{ days} + 56 \text{ mins} =$ _____ days _____ hr(s)

11. $4 \text{ mos} + 15 \text{ yrs} + 10 \text{ wks} + 9 \text{ wks} + 2 \text{ mos} + 7 \text{ wks} + 1 \text{ yr} =$ _____ yrs _____ wks

12. $90 \text{ mins} + 10 \text{ hrs} + 4 \text{ hrs} + 2 \text{ hrs} + 300 \text{ mins} + 300 \text{ mins} + 30 \text{ mins} =$ _____ day _____ hrs

13. $12 \text{ hrs} + 6 \text{ days} + 48 \text{ hrs} + 20 \text{ hrs} + 12 \text{ hrs} + 3 \text{ days} + 4 \text{ hrs} + 1 \text{ day} =$ _____ wks

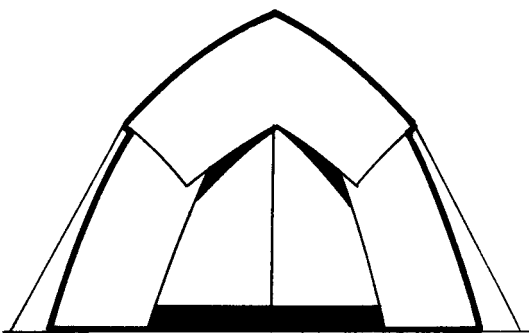
14. $25 \text{ mins} + 15 \text{ secs} + 4 \text{ mins} + 120 \text{ secs} + 300 \text{ mins} + 300 \text{ secs} + 20 \text{ mins} + 3 \text{ mins} + 45 \text{ secs} =$ _____ hrs

••••• Time and Money Brain Teasers

4. Hal wants to attend camp in Troy, Wisconsin. He needs to have \$350.00 to pay his way for two weeks. He has started mowing lawns and saving money. Fill in each blank.
- The first week he saved 4% of his goal: _____
 - The second week he saved 12% more of his goal: _____
 - The third week he saved another 15% of his goal: _____
 - The fourth week he saved 25% more of his goal: _____
 - The fifth week he saved 14% more of his goal: _____
 - The sixth week he saved another 30% of his goal: _____
- Was Hal able to pay his way to summer camp? _____

Big Deal Shields' Warehouse of Super Savings lets you make the choice. For everything being sold, you can choose one of two ways to save money on the deal. Circle the correct answer.


5. Price: \$199.00



Which is the better deal?

- \$50.00 off purchases of \$100.00 or more
- 35% off any purchase

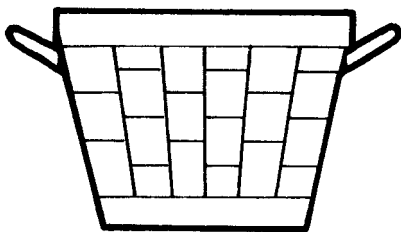
6. Price: \$49.99



Which is the better deal?

- Get \$10.00 back in company rebate
- Save 18% on any sporting equipment

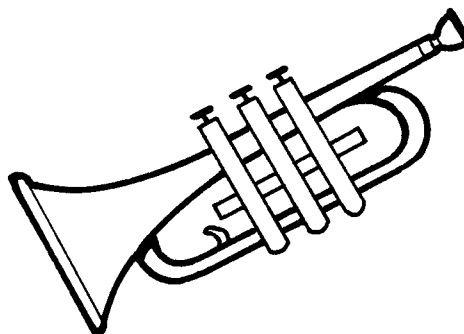
7. Price: \$8.89



Which is the better deal?

- Buy one get a second free
- Big sale—30% off

8. Price: \$150.00



Which is the better deal?

- Sale—40% off
- \$50.00 off any purchase