


# Table of Contents

Introduction . . . . .	3
Practice 1: Drawing What Comes Next in a Series (Objects) . . . . .	4
Practice 2: Drawing What Comes Next in a Series (Shapes) . . . . .	5
Practice 3: Drawing What Comes Next in a Series (Shapes) . . . . .	6
Practice 4: Writing What Comes Next in a Series (Letters) . . . . .	7
Practice 5: Writing What Comes Next in a Series (Numbers) . . . . .	8
Practice 6: Writing What Comes Next in a Series (Numbers) . . . . .	9
Practice 7: Identifying Patterns (Shapes) . . . . .	10
Practice 8: Identifying Patterns (Objects) . . . . .	11
Practice 9: Identifying Patterns (Objects) . . . . .	12
Practice 10: Identifying a Series of Numbers in a Pattern . . . . .	13
Practice 11: Identifying a Series of Numbers in a Pattern . . . . .	14
Practice 12: Identifying Missing Numbers in a Pattern . . . . .	15
Practice 13: Completing a Pattern . . . . .	16
Practice 14: Finding Missing Shapes in a Series . . . . .	17
Practice 15: Finding Missing Shapes in a Series . . . . .	18
Practice 16: Classifying Shapes in a Group . . . . .	19
Practice 17: Identifying Missing Numbers in a Series . . . . .	20
Practice 18: Identifying Missing Numbers in a Chart . . . . .	21
Practice 19: Problem Solving with Patterns . . . . .	22
Practice 20: Creating Patterns . . . . .	23
Practice 21: Using a Tally Chart to Solve Problems . . . . .	24
Practice 22: Using a Tally Chart to Solve Problems . . . . .	25
Practice 23: Reading and Interpreting Pictographs . . . . .	26
Practice 24: Using Pictographs to Solve Problems . . . . .	27
Practice 25: Using Pictographs to Solve Problems . . . . .	28
Practice 26: Completing a Graph . . . . .	29
Practice 27: Completing a Graph . . . . .	30
Practice 28: Reading and Interpreting Bar Graphs . . . . .	31
Practice 29: Reading and Interpreting Bar Graphs . . . . .	32
Practice 30: Reading and Interpreting Bar Graphs . . . . .	33
Practice 31: Reading and Interpreting Bar Graphs . . . . .	34
Practice 32: Reading and Interpreting Bar Graphs . . . . .	35
Practice 33: Interpreting Information from a Chart . . . . .	36
Practice 34: Using a Chart to Solve Problems . . . . .	37
Practice 35: Using a Venn Diagram to Solve Problems . . . . .	38
Practice 36: Using a Circle Graph to Solve Problems . . . . .	39
Test Practice 1 . . . . .	40
Test Practice 2 . . . . .	41
Test Practice 3 . . . . .	42
Test Practice 4 . . . . .	43
Test Practice 5 . . . . .	44
Test Practice 6 . . . . .	45
Answer Sheet . . . . .	46
Answer Key . . . . .	47


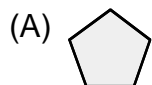
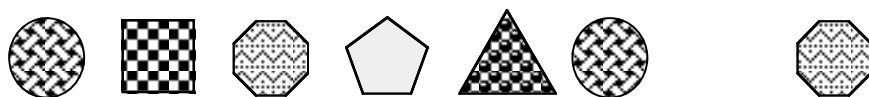
# Practice 15




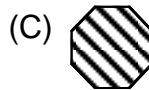
1. Find the missing shape.



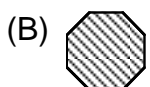
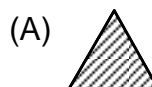
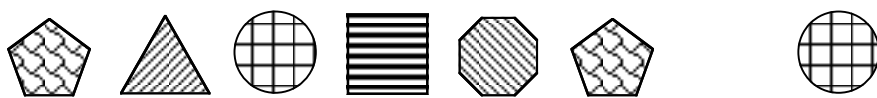
2. Find the missing shape.



3. Find the missing shape.



4. Find the missing shape.







# Practice 27



Look at these pictures of Joe, Spud, Helena, and Joanna. Count them to complete the graph. Fill in the spaces on the graph.



	1	2	3	4	5	6	7
a.  Joe							
b.  Joanna							
c.  Spud							
d.  Helena							