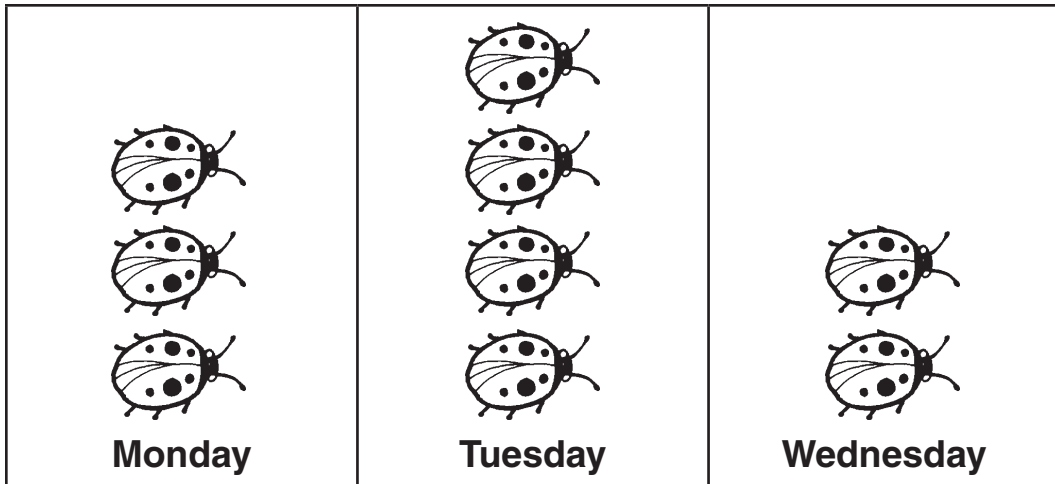




# Buggy Math

**Directions:** Look at the ladybug graph. Answer the questions.



- How many ladybugs were seen on Monday? \_\_\_\_\_
- How many ladybugs were seen on Tuesday? \_\_\_\_\_
- How many were seen on Monday and Tuesday? \_\_\_\_\_
- How many ladybugs were seen in all? \_\_\_\_\_

Add or subtract.

$$\begin{array}{r} 5. \quad 25 \\ + 14 \\ \hline \end{array}$$

$$\begin{array}{r} 6. \quad 28 \\ - 12 \\ \hline \end{array}$$

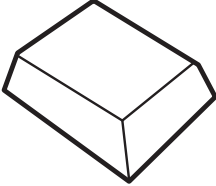

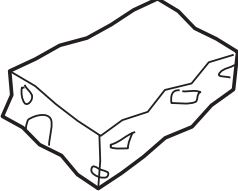


$$\begin{array}{r} 7. \quad 17 \\ + 32 \\ \hline \end{array}$$

$$\begin{array}{r} 8. \quad 19 \\ - 10 \\ \hline \end{array}$$



## Bake Sale Math

**Directions:** Use the pictures to figure out the answers to the equations.

 <p><b>fudge 25¢</b></p>	 <p><b>cookie 50¢</b></p>	 <p><b>brownie 25¢</b></p>
 <p><b>cupcake 75¢</b></p>		 <p><b>cake \$1.00</b></p>

If you were to buy the following combinations of items, how much would they cost?

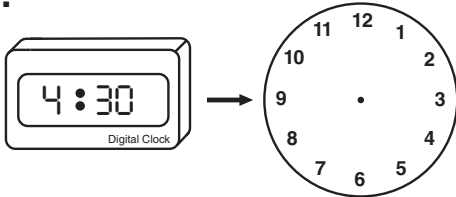
- cupcake + fudge = \_\_\_\_\_
- cookie + brownie = \_\_\_\_\_
- cake + fudge = \_\_\_\_\_
- cookie + cake = \_\_\_\_\_
- brownie + cupcake = \_\_\_\_\_
- cookie + fudge = \_\_\_\_\_
- How much would two brownies cost? = \_\_\_\_\_
- How much would three cupcakes cost? = \_\_\_\_\_



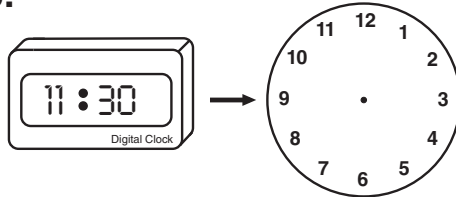
# Digital to Analog Dials

**Directions:** Look at the time on the digital clock. Draw hands on the round clock to show the same time.

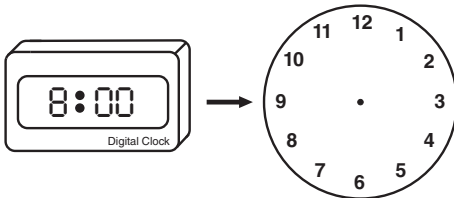
1.



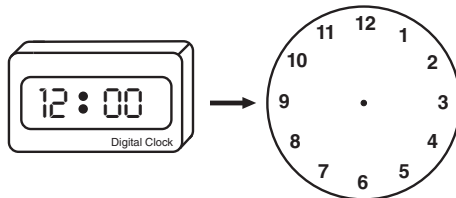
5.



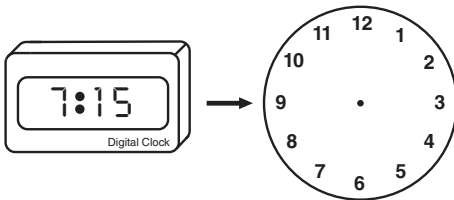
2.



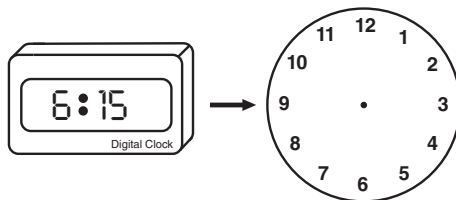
6.



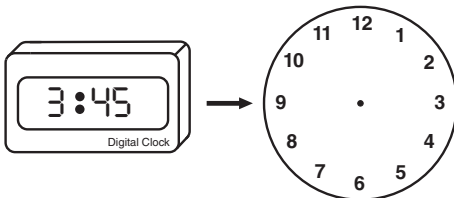
3.



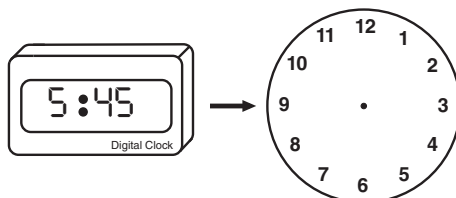
7.



4.



8.





# Fun in the Sun

**Directions:** A fraction shows a part of an item. Color each picture to show the fraction.

1. Color  $\frac{1}{3}$  of the circle yellow. Color the rest of the circle blue.



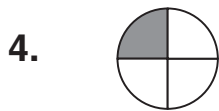
2. Color  $\frac{1}{3}$  of the circle red. Color the rest of the circle green.



3. Color  $\frac{2}{3}$  of the circle orange. Color the rest of the circle blue.




Draw a line to match each picture to the fraction it shows.



$$\frac{1}{4}$$



$$\frac{1}{2}$$



$$\frac{1}{3}$$



$$\frac{1}{6}$$