







Matching Sets


Directions: Look at the first box of pennies, nickels, dimes, and quarters on the *left*. Find a box of pennies, nickels, dimes, and quarters on the *right* that contains the same amount. Draw a line to match the sets. Repeat with the other boxes of coins.


1. 


2. 


3. 

4. 

A. 

B. 

C. 

D. 



Ring Me Up!

Directions: Use the prices in the bins to help you add up your grocery bill for each of the shopping carts below.

