


Table of Contents












Introduction	3
Practice 1: Plane Shapes and Solid Shapes	4
Practice 2: Solid Shapes	5
Practice 3: Solid Patterns	6
Practice 4: Quadrilaterals: Squares and Rectangles	7
Practice 5: Quadrilaterals: Other Shapes with Four Sides and Four Angles	8
Practice 6: Polygons	9
Practice 7: Lines of Symmetry	10
Practice 8: Symmetry	11
Practice 9: Sorting Shapes	12
Practice 10: More Than One Line of Symmetry	13
Practice 11: Same Size and Same Shape	14
Practice 12: Similar or Congruent?	15
Practice 13: Count Those Sides and Angles!	16
Practice 14: Right Angles	17
Practice 15: What Is an Angle?	18
Practice 16: Identifying Angles	19
Practice 17: Angles, Angles, Angles.	20
Practice 18: Naming Angles.	21
Practice 19: Triangles: By the Sides	22
Practice 20: Triangles: By the Angles	23
Practice 21: Lines, Line Segments, and Rays	24
Practice 22: Name the Lines, Line Segments, and Rays	25
Practice 23: Angles	26
Practice 24: More About Angles	27
Practice 25: Parallel Lines and Intersecting Lines	28
Practice 26: Perpendicular Lines	29
Practice 27: More Work with Parallel and Intersecting Lines	30
Practice 28: Flips and Slides	31
Practice 29: Twists and Turns	32
Practice 30: Parts of a Solid.	33
Practice 31: Circles	34
Practice 32: Perimeter	35
Practice 33: Finding the Area of Squares and Rectangles	36
Practice 34: Area of a Triangle.	37
Practice 35: Area of a Parallelogram	38
Practice 36: Volume of a Cube or a Rectangular Prism	39
Test Practice Pages	40
Answer Sheet	46
Answer Key	47

Practice 22



Name the Lines, Line Segments, and Rays

Directions: Identify each kind of line.

<p>1.</p>  <p>Line Line Segment Ray</p>	<p>2.</p>  <p>Line Line Segment Ray</p>	<p>3.</p>  <p>Line Line Segment Ray</p>
<p>4.</p>  <p>Line Line Segment Ray</p>	<p>5.</p>  <p>Line Line Segment Ray</p>	<p>6.</p>  <p>Line Line Segment Ray</p>
<p>7.</p>  <p>Line Line Segment Ray</p>	<p>8.</p>  <p>Line Line Segment Ray</p>	<p>9.</p>  <p>Line Line Segment Ray</p>

Directions: Draw each kind of line.

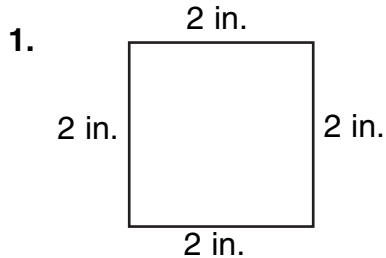
<p>10. line with points A, B, and C</p>	<p>11. line segment with endpoints D and E</p>	<p>12. ray with points F and G</p>
<p>13. line with points H, I, and J</p>	<p>14. ray with points K, L, and M</p>	<p>15. line segment with endpoints N and O</p>
<p>16. ray with points P, Q, and R</p>	<p>17. line with points S and T</p>	<p>18. line segment with endpoints U and V</p>

Practice 32

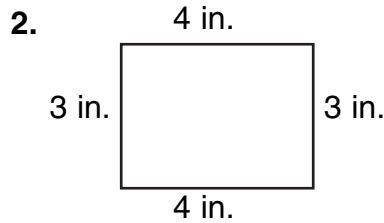


Perimeter

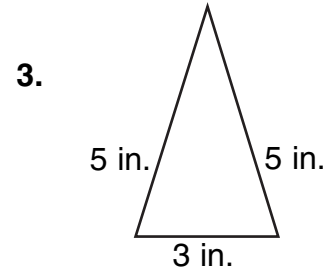
Directions: The perimeter (P) is the area around the outside of the shape. To find the perimeter, add all of the sides of the shape together.



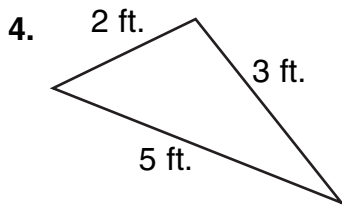
$P = \underline{\hspace{2cm}}$ in.



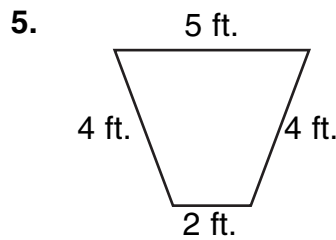
$P = \underline{\hspace{2cm}}$ in.



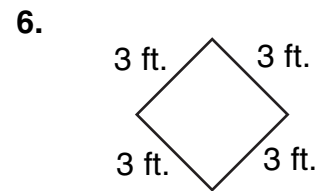
$P = \underline{\hspace{2cm}}$ in.



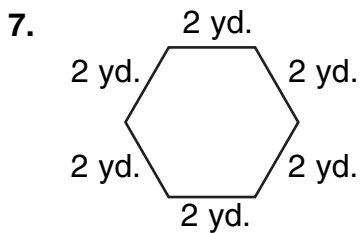
$P = \underline{\hspace{2cm}}$ ft.



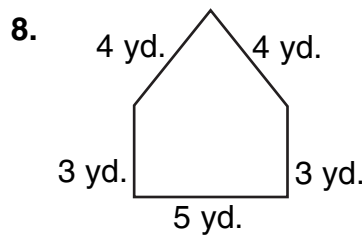
$P = \underline{\hspace{2cm}}$ ft.



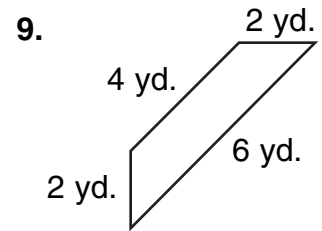
$P = \underline{\hspace{2cm}}$ ft.



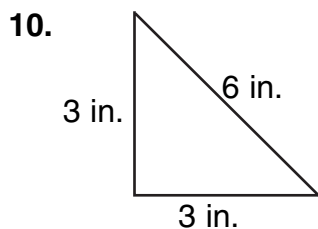
$P = \underline{\hspace{2cm}}$ yd.



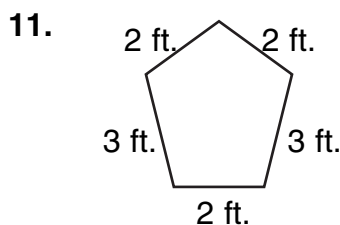
$P = \underline{\hspace{2cm}}$ yd.



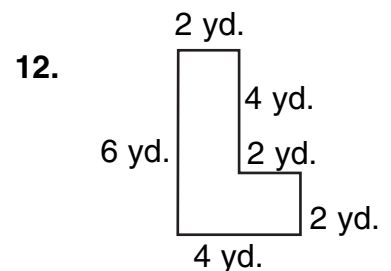
$P = \underline{\hspace{2cm}}$ yd.



$P = \underline{\hspace{2cm}}$ in.



$P = \underline{\hspace{2cm}}$ ft.



$P = \underline{\hspace{2cm}}$ yd.