

Table of Contents

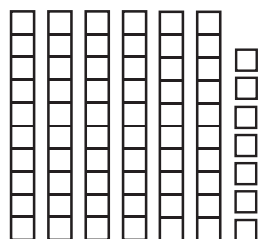
Introduction.....	3
Practice 1: Place Value: Numbers 1 to 10.....	4
Practice 2: Reviewing Tens and Ones.....	5
Practice 3: Place Value Blocks: Counting by Tens.....	6
Practice 4: Place Value Blocks: Tens and Ones.....	7
Practice 5: Place Value Blocks: Tens and Ones.....	8
Practice 6: Comparing Numbers.....	9
Practice 7: Expanded Notation: Tens and Ones.....	10
Practice 8: Adding Two-Digit Numbers Without Regrouping.....	11
Practice 9: Adding More Two-Digit Numbers Without Regrouping.....	12
Practice 10: Adding Even More Two-Digit Numbers Without Regrouping.....	13
Practice 11: Addition with Regrouping.....	14
Practice 12: Word Problems.....	15
Practice 13: How Many More Miles? (Two-Digit Addition with Regrouping).....	16
Practice 14: Subtracting with Two-Digit Numbers.....	17
Practice 15: Subtracting with More Two-Digit Numbers.....	18
Practice 16: Subtraction with Regrouping.....	19
Practice 17: Subtract and Check.....	20
Practice 18: Place Value Blocks: Hundreds.....	21
Practice 19: More Place Value Blocks: Hundreds, Tens, and Ones.....	22
Practice 20: Place Value Blocks: Hundreds, Tens, and Ones.....	23
Practice 21: What’s the Value? (Place Value).....	24
Practice 22: Adding and Subtracting Hundreds.....	25
Practice 23: Expanded Notation: Hundreds, Tens, and Ones.....	26
Practice 24: Missing Numbers in the Hundreds.....	27
Practice 25: Adding in the Hundreds.....	28
Practice 26: Hundreds of Dollars.....	29
Practice 27: Adding with One Regrouping.....	30
Practice 28: More Addition with One Regrouping.....	31
Practice 29: Subtraction with Three Digits.....	32
Practice 30: Subtraction in the Hundreds.....	33
Practice 31: Subtraction in the Hundreds with Regrouping.....	34
Practice 32: Subtraction Crossword Puzzle.....	35
Practice 33: Money: Nickels and Dimes.....	36
Practice 34: Money: Nickels, Dimes, and Quarters.....	37
Practice 35: Fractions.....	38
Practice 36: Name That Fraction!.....	39
Test Practice 1.....	40
Test Practice 2.....	41
Test Practice 3.....	42
Test Practice 4.....	43
Test Practice 5.....	44
Test Practice 6.....	45
Answer Sheet.....	46
Answer Key.....	47

Practice 5




Write the number of tens and ones.

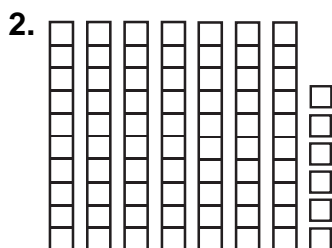
Example




Tens	Ones
5	8
58	




Tens	Ones




Tens	Ones




Tens	Ones



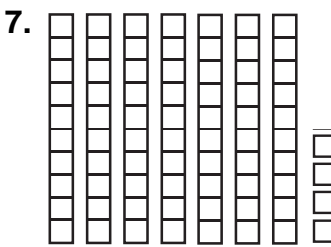
Tens	Ones



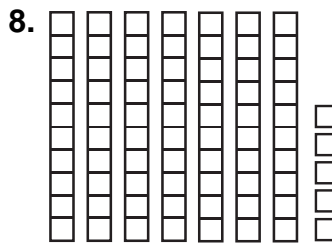
Tens	Ones



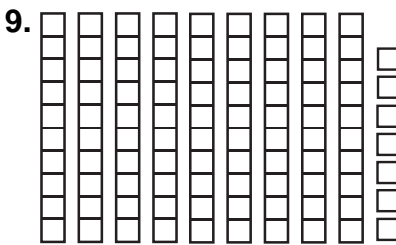
Tens	Ones



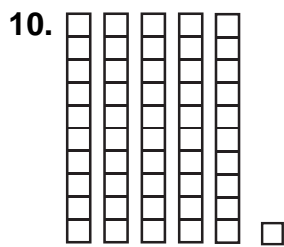
Tens	Ones



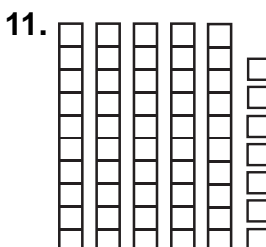
Tens	Ones



Tens	Ones



Tens	Ones





Tens	Ones


Practice 20





Write the number.


1.  _____

2.  _____

3.  _____

4.  _____

5.  _____

6.  _____